

Fingerprints

QUIZ

Name _____

1. What are the three main groups for fingerprints? _____, _____, & _____


2. Fill in the blanks with the correct numbers. Choose from: 5%, 35%, and 60%.

_____ % of people have loops, _____ % have whorls, and _____ % have arches

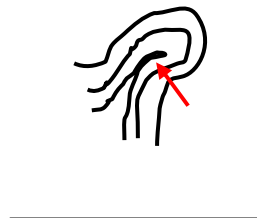
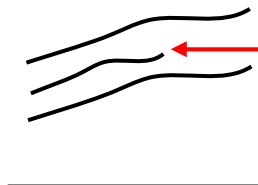

3. Identify each fingerprint below using the classification groups listed.

Plain arch
Tented arch
Radial loop (right thumb)
Ulnar loop (right thumb)

Plain whorl
Central pocket whorl
Double loop
Accidental



4. Identify the ridge characteristics using the word list provided.



WORD LIST:
Bridge
Core
Crossover
Dot or Island
Ending Ridge
Fork (Bifurcation)

